

Part I

60

Circle the letter corresponding to the correct answer.

1) $11 - 3 =$

a) 8

b) 6

c) 7

- 2) Rana collects 15 shells at the beach. She gives her brother 6 of them.
How many shells does she have left?



a) 21

b) 9

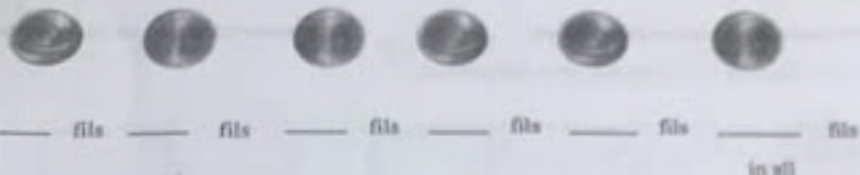
c) 8

- 3) Mark the related addition fact.


$$9 - 2 = 7$$

a) $9 + 2 = 11$ b) $9 - 7 = 2$ c) $7 + 2 = 9$

24) Count by tens. Write the numbers. How much in all?



25) Laila has 37 raisins in her lunch. How many tens and ones are in 37?




26) a) Adnan gets two toys. He uses 14 tickets to get them.

Draw a circle around the toys he got.

b) Hind gets two toys. She uses 28 tickets to get them.

Draw a line under the toys she got.

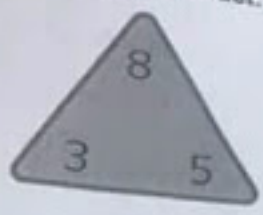


End of Exam
Good Luck

Part II

40

21) Add and subtract. Complete the fact family.



3 + 5 =

8 - 3 =

5 + 3 =

8 - 5 =

22) Hessa had 10 sandals. She gave away 6 of them.
How many sandals does Hessa have left?



_____ ○ _____ ○ _____ sandals

23) Write how many more. Then write the number.



_____ fifteen

10 and _____ more

17) 3 tens + 4 tens = _____ tens

a) 43

b) 34

c) 7

18) Find the sum.

37
+ 20
.....

a) 47

b) 57

c) 17

19) Faris has 16 video games. He is given 9 more video games.

How many video games does Faris have in all?



a) 10

b) 7

c) 25

Add.

tens	ones
5	2
+	4

a) 56

b) 52

c) 92

12) A number is greater than 12 and less than 14. What is the number?

a) 13

b) 14

c) 12

13) Compare.

95 ○ 59

a) <

b) >

c) =

14) Write the number. One hundred fourteen

a) 104

b) 110

c) 114

15) Abdulaziz counted to 106. What number comes next?

a) 105

b) 107

c) 108

6) What number is missing? 96, 97, 98,, 100, 101

a) 99

b) 98

c) 100

8) Hana has 20 rings. She gets 3 more rings. How many rings does Hana have?

- a) 32 b) 17 c) 23



9) Shalma is thinking of a number. It has 8 tens and 9 ones. What is the number?

- a) 89 b) 98 c) 17



10) Mahra has 34 books. She gets 10 more books.
How many books does Mahra have in all?

- a) 24 b) 34 c) 44



11) Count by fives. How much money is shown?



- a) 30 fils b) 25 fils c) 50 fils

4) When I am added to 8, the sum is 12. What number am I?

8 12

a) 4

b) 12

c) 8

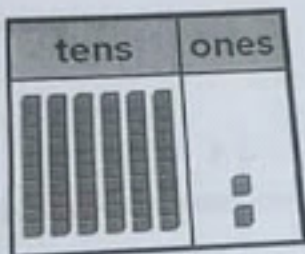
5) $12 - 1 = \dots\dots\dots$

a) 13

b) 11

c) 10

6) What is the number?



a) 62

b) 26

c) 60



7) There are 3 boxes. Each box has 10 toys in it.
How many toys are there in all?

a) 20

b) 30

c) 13