

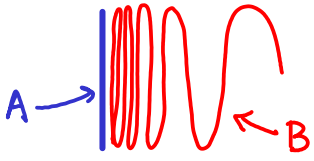
# C3.1 Algebraic Topology

Oxford 2019

Sheet 0 (not for hand in)

Prof. Alexander Ritter  
ritter@maths.ox.ac.uk

1) Topologist's sine curve  $S = \underbrace{\{(x, \sin \frac{1}{x}) : x \in (0, 1]\}}_B \cup \underbrace{0 \times [0, 1]}_A \subseteq \mathbb{R}^2$



Show that  $S$  is connected, but not path-connected indeed:  $A, B$  are the path-components.

2) Let  $0 \rightarrow A \xrightarrow{\alpha} B \xrightarrow{\beta} C \rightarrow 0$  be a short exact sequence of abelian groups, meaning:  $A, B, C$  are abelian groups,  $\alpha, \beta$  group homs, and  $\ker(\text{map}) = \text{Im}(\text{previous map})$  in the sequence.

Show that if  $C$  is a free abelian group ( $C \cong \bigoplus_{i \in I} \mathbb{Z}$ ) then

$$B \cong A \oplus C.$$

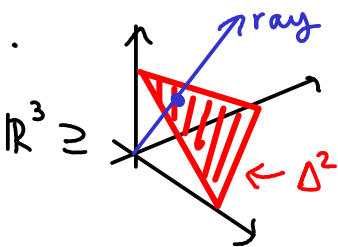
Give an example of  $A, B, C$  for which this fails when  $C$  is not free.

3) Recall the Brouwer fixed point theorem

Let  $D^n = \{x \in \mathbb{R}^n : \|x\| \leq 1\}$ ,  $f: D^n \rightarrow D^n$  continuous  $\Rightarrow \exists p \in D^n, f(p) = p$ .

Use this to prove that any real  $n \times n$  matrix with (strictly) positive entries has a real eigenvalue  $\lambda > 0$  with eigenvector  $(v_1, \dots, v_n)$  s.t.  $v_i \geq 0 \forall i$ .

Hint.



Consider  $X = \{\text{rays in "positive octant" of } \mathbb{R}^n\}$

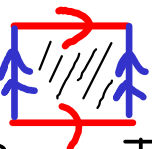
show  $X \xrightarrow{\text{homeo.}} \Delta^{n-1} = \{x \in \text{octant} : \sum x_i = 1\} \cong D^{n-1}$   
ray  $\mapsto$  ray  $\cap \Delta^n$

4) Let  $A =$  free abelian group generated by the intervals  $[a, b] \subseteq \mathbb{R}$ , with  $a, b \in \mathbb{Q}$   
 $B = A / \langle \text{relations } [a, b] + [b, c] = [a, c] \rangle$

Show that  $B$  is a free abelian group by finding an explicit basis (in other words, a  $\mathbb{Z}$ -linearly independent and spanning set, if we view  $B$  as a  $\mathbb{Z}$ -module)

5) View the torus as  $T^2 = \mathbb{R}^2 / (\mathbb{Z}^2\text{-translation})$  so  $(x, y) \sim (x+n, y+m)$  for  $n, m \in \mathbb{Z}$

Let  $L \subseteq \mathbb{R}^2$  be a straight line through  $0$ . Draw some pictures of  $L$  inside  $T^2$  when you view  $T^2$  as a square with side-identifications  $\rightarrow$



How many path-components does  $T^2 \setminus L$  have, in terms of the slope of  $L$ ?

(Try slope  $\in \mathbb{Q}$  first)