

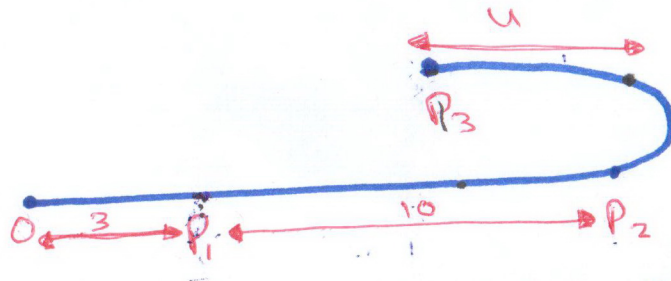
ملخص فيديوهات مادة..

الدايناميك



Ch 12

Section 2 :- Kinematics of particles



• **Position**: Distance from the origin

$$P_1 = 3 \quad P_2 = 13$$

• **Displacement**: change in position

$$S_{12} = 10$$

$$S_{13} = 10 + (-4) = 6$$

• **Distance**: length of the path

$$D_{13} = 14$$

$$D_{12} = 10$$

• **Average Velocity**: Rate of Displacement

$$\text{Ⓢ } \frac{D}{t} = v_{\text{avg}}$$

$$v_{\text{avg}} = \frac{\Delta S}{\Delta t} = \frac{6}{4} = 1.5 \text{ m/s}$$

• **Average Speed**: Rate of Distance

$$S_{\text{avg}} = \frac{\sum |S|}{\Delta t} = \frac{14}{4} = 3.5$$

$$\text{Ⓢ } S_{\text{avg}} \neq v_{\text{avg}}$$

• **Instantaneous Velocity**

$$S = 5t^2 - 4t + 9$$

$$v = \frac{dS}{dt} = 10t - 4$$

≡ acceleration

$$a = \frac{dv}{dt}$$

• **Average acceleration**

$$a_{\text{avg}} = \frac{\Delta v}{\Delta t}$$

لجنه
امتحانين
س

. Constant acceleration

$$1) v_2 = v_1 + at$$

$$2) DS = v_1 t + \frac{1}{2} at^2$$

$$3) v_2^2 = v_1^2 + 2a DS$$

$$+ 4) DS = \left(\frac{v_1 + v_2}{2} \right) t$$

* . Constant velocity

$$S_1 = S_0 + v_0 t$$

ex 12.1

$$v = 3t^2 + 2t$$

at a $\therefore t = 3 \text{ sec}$

$$\begin{aligned} \text{① } v &= \frac{ds}{dt} \quad ds = v \cdot dt \\ \int_0^3 ds &= \int_0^3 (3t^2 + 2t) \cdot dt \\ ds &= t^3 + t^2 = \boxed{36} \end{aligned}$$

$$\begin{aligned} a &= \frac{dv}{dt} = 6t + 2 \\ &= \boxed{20} \end{aligned}$$

P 12.2

$$v = 2 \text{ m/s}$$

$$a = 60 \text{ s}^{-2}$$

(at v) $\therefore t = 3 \text{ sec}$

$$\begin{aligned} a &= \frac{dv}{dt} = 60 \\ \int_0^3 ds &= \int_0^3 v \cdot dt = \int_0^3 (2 + 30t) \cdot dt \\ ds &= 2t + 15t^2 = 60t + 15t^3 = 60 \cdot 3 + 15 \cdot 27 = 60 \cdot 3 + 405 = 600 + 405 = 1005 \end{aligned}$$

$$\begin{aligned} v &= (300t + 32)^{1/5} \\ v &= \boxed{3.93 \text{ m/s}} \end{aligned}$$

$$\frac{ds}{dt} = (300t + 32)^{1/5}$$

$$s = \frac{(300t + 32)^{1.2}}{1.2(300)}$$

$$\therefore s = 10$$

P 12.17

$$a = 2t - 1 \quad \therefore s = 1 \quad v = 2 \quad @ t = 0$$

Find the total displacement
@ $t = 6 \text{ sec}$

$$a = 2t - 1 \rightarrow \frac{dv}{dt} = 2t - 1$$

$$\int_2^v dv = \int_0^t (2t - 1) dt$$

$$v - 2 = t^2 - t \rightarrow \boxed{v = t^2 - t + 2}$$

$$\frac{ds}{dt} = t^2 - t + 2 \rightarrow ds = (t^2 - t + 2) dt$$

$$\int_1^s ds = \frac{t^3}{3} - \frac{t^2}{2} + 2t$$

$$\boxed{s = \frac{t^3}{3} - \frac{t^2}{2} + 2t + 1}$$

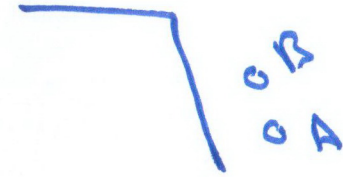

$$v(6) = 6^2 - 6 + 2 = 32 \text{ m/s}$$

$$s(6) = 67 \text{ m}$$

$$s(0) = 1 \text{ m}$$

$$d = P(6) - P(0) = \boxed{66 \text{ m}}$$

P 12.6



$$dy = v \cdot t + \frac{1}{2} at^2$$


$$dy_A = 0 + \frac{1}{2} (9.81) (2)^2 = 19.62 \text{ m}$$

$$dy_B = 0 + \frac{1}{2} (9.81) (1)^2 = 4.91 \text{ m}$$

$$dy = dy_A - dy_B$$

$$= \boxed{13.71 \text{ m}}$$

P12.9



$$\Delta y = v_0 t + \frac{1}{2} a t^2$$

$$= 0 + \frac{1}{2} (9.81) (3)^2$$

$$= \boxed{44.15 \text{ m}}$$


$$v_2 = v_1 + a t$$

$$= 0 + (9.81) (3)$$

$$= 29.43 \text{ m/s} \downarrow$$



P12.15



$$\Delta x_1 = v_0 t + \frac{1}{2} a t^2$$

$$= 0 + \frac{1}{2} (0.5) (60)^2 = \boxed{900 \text{ m}}$$

$$v = v_0 + a t$$

$$= 0 + 0.5 \times 60 = \boxed{30 \text{ m/s}}$$

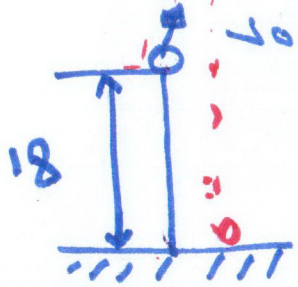
$$\Delta x_2 = v \cdot t = 30 \times 960 = \boxed{27000 \text{ m}}$$

$$x_2^2 = x_1^2 + 2 a \Delta x_3$$

$$\Delta x_3 = \boxed{450 \text{ m}}$$

$$\Delta x_{\text{total}} = \boxed{28.4 \text{ km}}$$

Ex: Find $v(t)$ & $y(t)$, y_{max} & the time when the ball hits the ground



$$\textcircled{1} \quad v(t) = v_0 + at$$

$$= -12 + 9.81t$$

$$\textcircled{2} \quad y(t) = v_0 t + \frac{1}{2} at^2$$

$$= -12t + \frac{1}{2} (9.81) t^2$$

$$\textcircled{3} \quad v_f^2 = v_i^2 + 2a\Delta s$$

$$0 = (-12)^2 + 2(9.81)\Delta s$$

$$\Delta s = \ominus 7.33 \text{ m}$$

المسافة التي يقطعها الكرة

$$\therefore y_{max} = 7.33 + 18 = \boxed{25.33 \text{ m}}$$

$$y = v_0 t + \frac{1}{2} at^2$$

$$18 = -12t + \frac{1}{2} (9.81) t^2$$

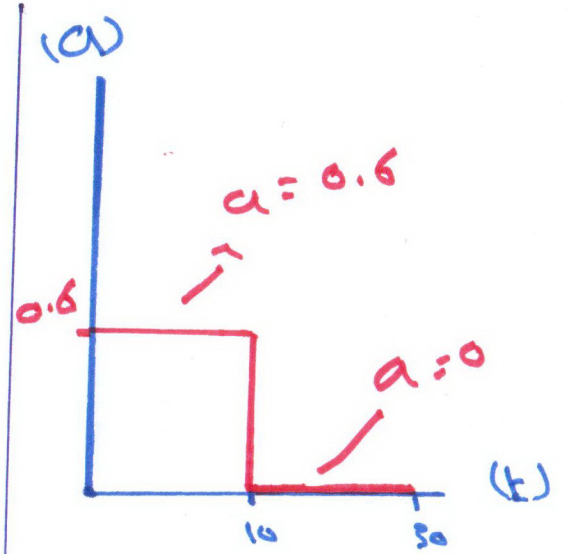
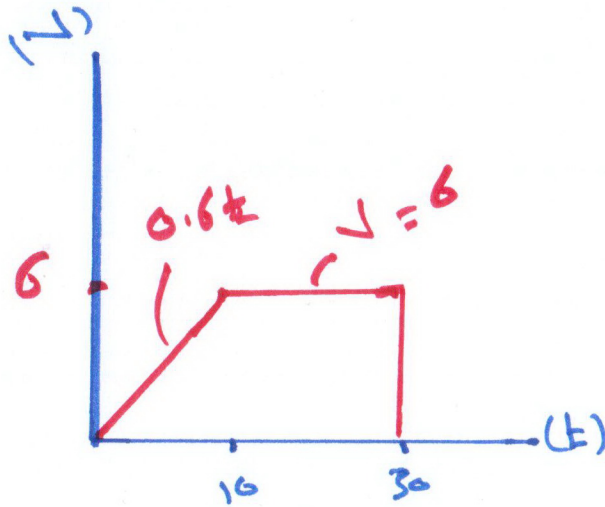
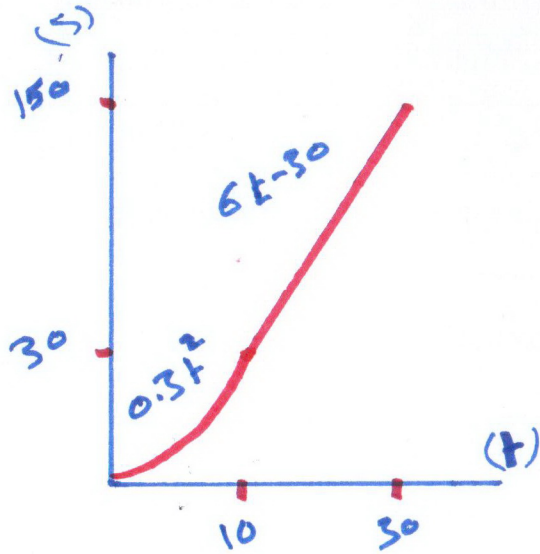
$$t = \boxed{3.55 \text{ sec}}$$

$$v_f^2 = v_i^2 + 2a\Delta s$$

$$= (-12)^2 + 2(9.81)(18)$$

$$v_f = \boxed{22.3 \text{ m/s}}$$

Ex 12.6



$\frac{d}{dt}(t^2 - t)$ (6-10)

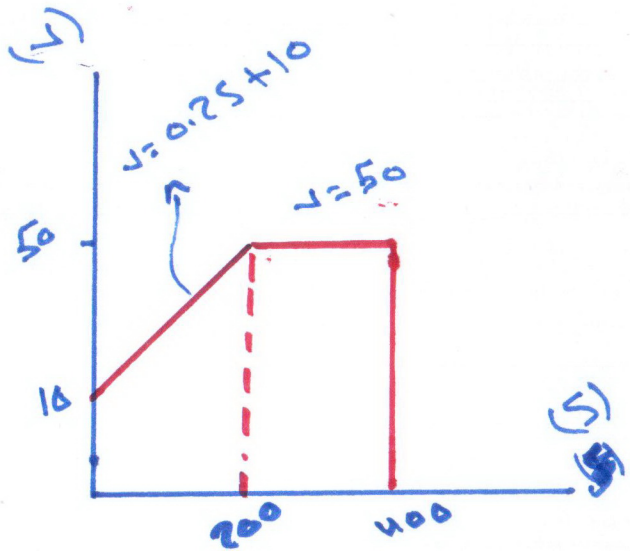
$v = \frac{ds}{dt} = 0.6t$

$v = \frac{ds}{dt} = 6$

$a = \frac{dv}{dt} = 0.6$

$a = \frac{dv}{dt} = 0$

Ex 12.8

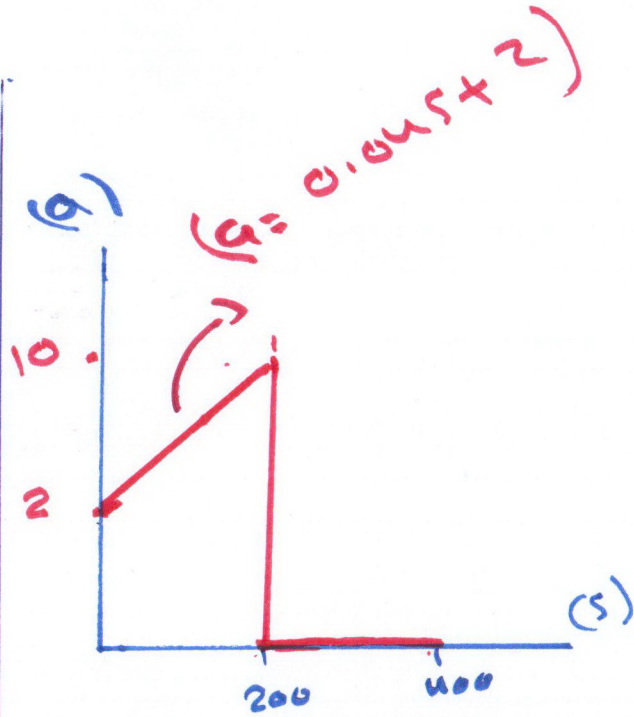


$a ds = v dv$

$a = v \frac{dv}{ds}$

$a = (0.25s + 10) \times 0.2$

$a = 0.045s + 2$



$s=0 \Rightarrow a=2$

$s=200 \rightarrow a=10$

$\therefore (ax+b) \rightarrow \left(\frac{b}{a}\right) \div b$

$\frac{ds}{dt} = v \quad dt = \frac{ds}{v}$

$\int_0^T dt = \int_0^s \frac{ds}{0.25s + 10}$

$t = (5 \ln(0.25s + 10) - 5 \ln(10))$

when $s=200$

$t = 8.05 \text{ sec} \rightarrow \text{u sec}$

$\frac{ds}{dt} = v \rightarrow dt = \frac{ds}{v}$

$\int_{8.05}^T dt = \int_{200}^{400} \frac{ds}{50}$

$t = 12 \text{ sec}$

$$\vec{r} = (x\mathbf{i} + y\mathbf{j} + z\mathbf{k}) \text{ m}$$

$$\vec{v} = \frac{d\vec{r}}{dt}$$

$$= (\dot{x}\mathbf{i} + \dot{y}\mathbf{j} + \dot{z}\mathbf{k}) \text{ m/s}$$

$$= (v_x\mathbf{i} + v_y\mathbf{j} + v_z\mathbf{k}) \text{ m/s}$$

$$|\vec{v}| = \sqrt{v_x^2 + v_y^2 + v_z^2}$$

$$\vec{a} = \frac{d\vec{v}}{dt}$$

$$= (\ddot{x}\mathbf{i} + \ddot{y}\mathbf{j} + \ddot{z}\mathbf{k})$$

$$= (a_x\mathbf{i} + a_y\mathbf{j} + a_z\mathbf{k})$$

$$= (a_x\mathbf{i} + a_y\mathbf{j} + a_z\mathbf{k}) \text{ m/s}^2$$

$$|\vec{a}| = \sqrt{a_x^2 + a_y^2 + a_z^2}$$

Ex 12.9

$$x = 8t \\ \therefore t = 2$$

$$v_x = \dot{x} = 8$$

$$v_y = \frac{d}{dt} \frac{1}{10} t^2$$

$$= \frac{d}{dt} \frac{(8t)^2}{10} \Big|_{t=2} = \frac{2 \times \dot{x}}{10} = \frac{2 \cdot 16 \cdot 8}{10} = 25.6$$

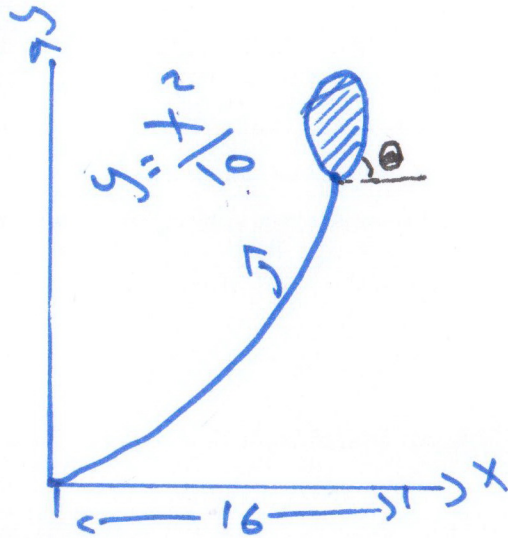
$$|v| = \sqrt{25.6^2 + 8^2} = 26.8 \text{ m/s}$$

$$\theta = \tan^{-1} \frac{v_y}{v_x} = \tan^{-1} \frac{25.6}{8} = 72.6^\circ$$

$$a_x = \frac{d^2}{dt^2} (8t) = \text{zero}$$

$$a_y = \frac{d^2}{dt^2} \frac{(8t)^2}{10} \Big|_{t=2} = 12.8$$

$$|a| = \sqrt{12.8^2 + 0^2} = 12.8$$



P 12.74

$$v = 3i + (6 - 2t)j$$

$$\therefore t_1 = 1 \text{ to } t_2 = 3$$

find dis?

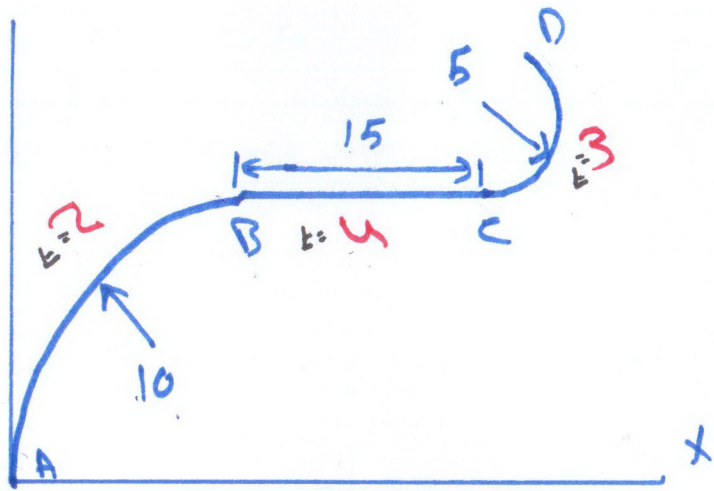
$$\vec{r} = 3ti + \left(6t - \frac{2t^2}{2}\right)j$$

$$\vec{r}_1 = (3i + 5j) \text{ m}$$

$$\vec{r}_3 = (9i + 9j) \text{ m}$$

$$\vec{\Delta r} = (6i + 4j) \text{ m}$$

P12.80



Find S_{avg} ...

$$S_{avg} = \frac{\sum d}{\sum k}$$

$$= \frac{\frac{(2\pi(10))}{4} + 15 + \frac{(2\pi(5))}{4}}{2 + 4 + 3}$$

$$= \boxed{4.28 \text{ m/s}}$$

P12.81) $x = 0.25t^3$, $y = 1.5t^2$, $z = 6 - 0.75t^{5/2}$

$$\therefore t = 2$$

$$\vec{r} = 0.25t^3 \mathbf{i} + 1.5t^2 \mathbf{j} + (6 - 0.75t^{5/2}) \mathbf{k}$$

$$\vec{v} = 0.75t^2 \mathbf{i} + 3t \mathbf{j} - 1.875t^{1.5} \mathbf{k}$$

$$\vec{a} = 1.5t \mathbf{j} + 3 \mathbf{j} - 2.8125t^{0.5} \mathbf{k}$$

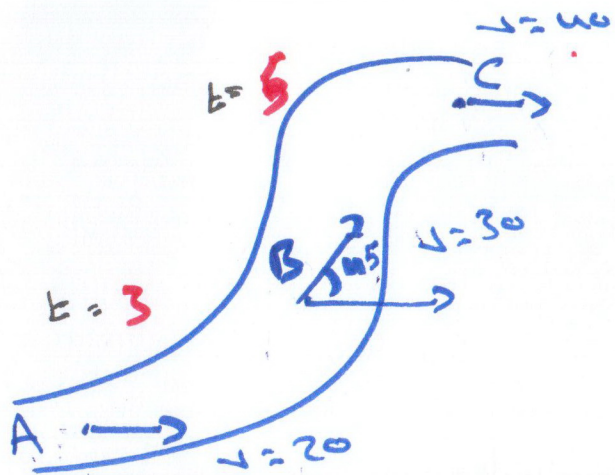
$$|\vec{v}| = \sqrt{\quad + \quad + \quad}$$

$$|\vec{a}| = \sqrt{\quad + \quad + \quad}$$

$$|\vec{v}| =$$

$$|\vec{a}| =$$

P12.79



$\bar{a}_{avg} = \frac{\Delta v}{\Delta t}$

$$\bar{a}_{AB} = \frac{(30 \cos 45 \mathbf{i} + 30 \sin 45 \mathbf{j}) - (20 \mathbf{i})}{3}$$

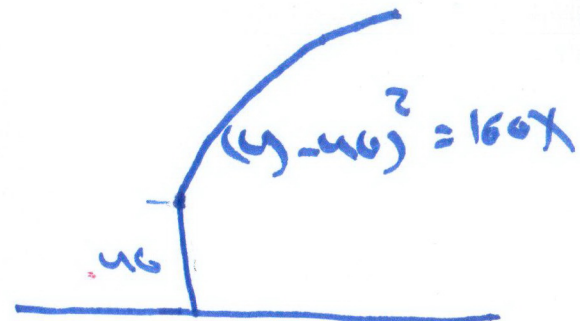
$$= (0.40 \mathbf{i} + 7.07 \mathbf{j}) \text{ m/s}^2$$

$$\bar{a}_{AC} = \frac{(40 \mathbf{i}) - (20 \mathbf{i})}{3 + 5}$$

$$= \boxed{2.5 \text{ m/s}^2}$$

P12.86

$y = 80 \text{ m}$
 $v_y = 180 \text{ m/s}$



$(y - 40)^2 = 160x$

$2(y - 40) \frac{dy}{dt} = 160 \frac{dx}{dt}$

$2(y - 40) a_y + 2v_y (a_x) = 160 a_x$

@ $y = 80 \quad v_y = 180$

$2(80 - 40) 180 = 160 a_x$

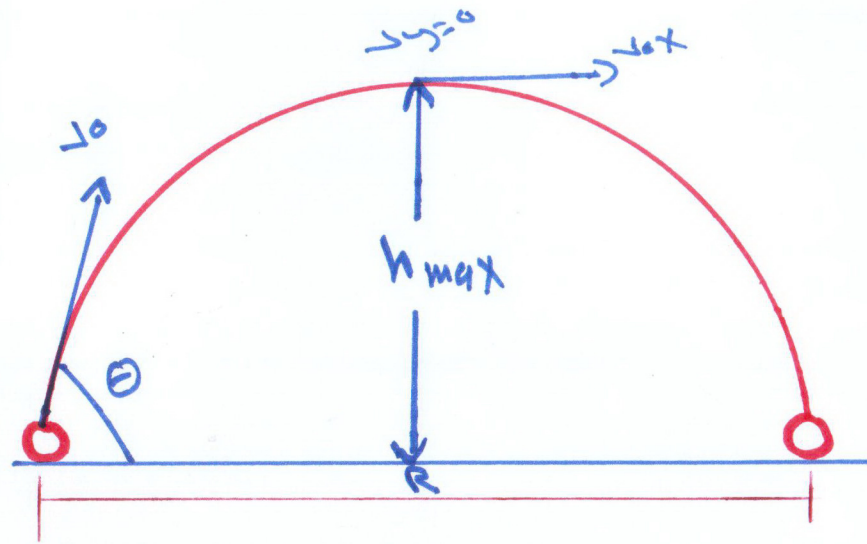
$\therefore a_x = 40 \text{ m/s}^2$

$|v| = \sqrt{180^2 + 40^2} = \boxed{201 \text{ m/s}}$

$2 \times 180^2 = 160 a_x$

$a_x = 405 \text{ m/s}^2$

$|a| = a_x = 405 \text{ m/s}^2$



$$a_y = -9.81$$

x - dir

$$v_{0x} = v_0 \cos \theta$$

$$a_x = 0$$

$$\Delta x = v_{0x} \cdot t$$

$$R = \frac{v_0^2 \sin 2\theta}{g}$$

$$h_{\max} = \frac{v_0^2 \sin^2 \theta}{2g}$$

y - dir

$$v_{0y} = v_0 \sin \theta$$

$$v_y = v_{0y} + a_y t$$

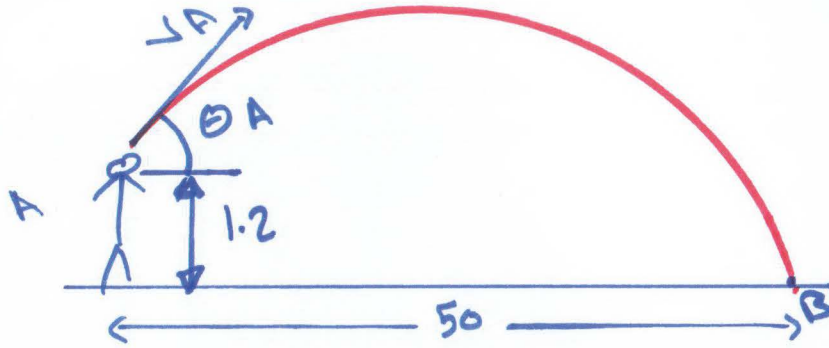
$$v_y^2 = v_{0y}^2 + 2a_y \Delta y$$

$$\Delta y = v_{0y} t + \frac{1}{2} a_y t^2$$

$$\Delta y = \left(\frac{v_{0y} + v_y}{2} \right) \cdot t$$

P12.891

$\therefore t = 2.5 \text{ sec}$



x-dir

$\Delta x = v \cdot t \cdot t$

$50 = v_A \cos \theta_A \cdot (2.5)$

$v_A \cos \theta_A = 20$

$v_A = \frac{20}{\cos \theta_A}$

y-dir

$\Delta y = v \cdot y \cdot t + \frac{1}{2} a t^2$

$-1.2 = v_A \sin \theta (2.5) - 4.9 (2.5)^2$

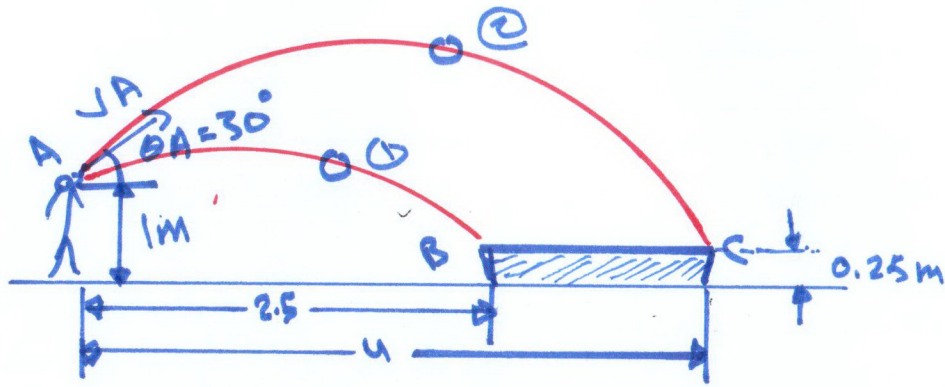
$29.425 = 2.5 \left(\frac{20}{\cos \theta_A} \right) \cdot \sin \theta$

$\tan \theta = 0.5885$

$\therefore \theta = 30.5^\circ$

$\therefore v_A = 23.2 \text{ m/s}$

P12.92



① $t_{0y} \perp$

x-dir

$$\Delta x = v \cdot \cos \theta \cdot t$$

$$2.5 = v \cdot \cos 30^\circ \cdot t \rightarrow \boxed{v = \frac{2.5}{\cos 30^\circ}}$$

y-dir

$$\Delta y = v \cdot \sin \theta \cdot t - 4.9 t^2$$

$$-1 = \left(\frac{2.5}{\cos 30^\circ} \right) \cdot \sin 30^\circ \cdot t - 4.9 t^2 \quad \therefore$$

$$\boxed{t_1 = 0.7065}$$

$$\boxed{v_{1x} = 4.1 \text{ m/s}}$$

② $t_{0y} \perp$

x-dir

$$4 = v \cdot \cos 30^\circ \cdot t$$

y-dir

$$-1 = v \cdot \sin 30^\circ \cdot t - 4.9 t^2$$

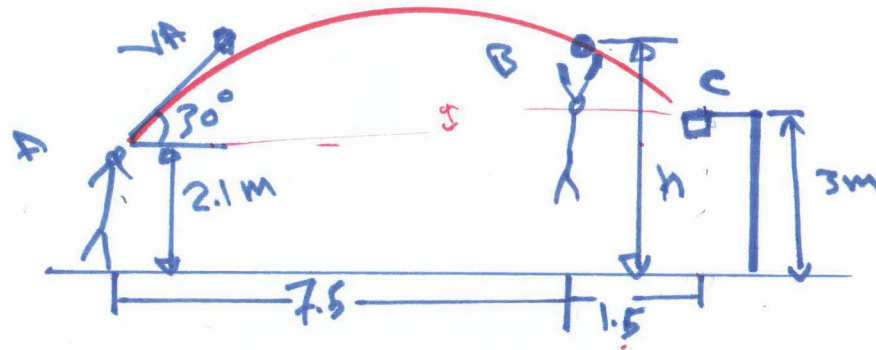
$$\boxed{t_2 = 0.822 \text{ Sec}}$$

$$\boxed{v_{0.2} = 5.62 \text{ m/s}}$$

$$\therefore \text{interval} = t_2 - t_1$$

$$\boxed{= 0.1165}$$

P12.99



x-dir

$$dx = v_A \cos 30^\circ t$$

$$9 = v_A t \cos 30^\circ$$

$$t = \frac{9}{v_A \cos 30^\circ}$$

y-dir

$$dy = v_A \sin 30^\circ t - 4.9 t^2$$

$$0.9 = v_A \sin 30^\circ \left(\frac{9}{v_A \cos 30^\circ} \right) - 4.9 \left(\frac{9}{v_A \cos 30^\circ} \right)^2$$

$$\therefore v_A = 11.1 \text{ m/s}$$

x-dir

$$7.5 = v_A \cos 30^\circ t$$

$$t = 0.78 \text{ s}$$

y-dir

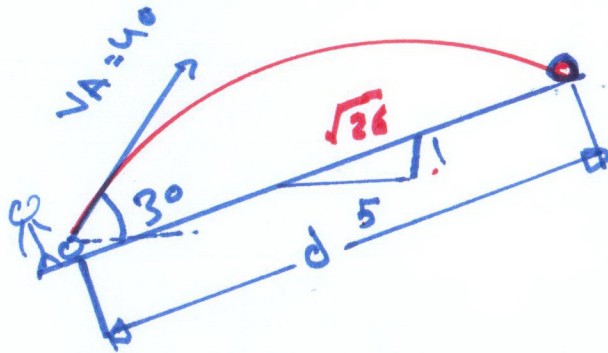
$$dy = v_A \sin 30^\circ t - 4.9 t^2$$

$$dy = 1.35 \text{ m}$$

$$\therefore h = 2.1 + 1.35$$

$$= 3.45 \text{ m}$$

P12.107
or 102



x-dir

$$\Delta x = v_A \cos \theta t$$

$$\frac{5}{\sqrt{26}} + d = 40 \cos 30 t$$

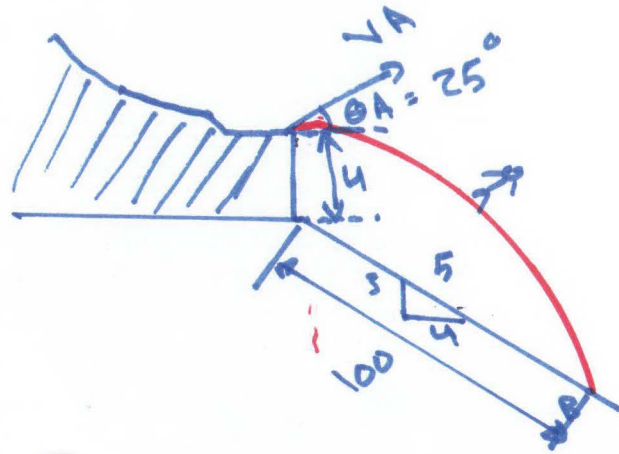
$$t = 0.0283 d$$

y-dir

$$\Delta y = v_A \sin \theta t + \frac{1}{2} a_y t^2$$

$$\frac{1}{\sqrt{26}} \cdot d = 40 \sin 30 - 4.9 \times (0.0283 d)^2$$

$$\therefore d = 94.4 \text{ m}$$



X-dir

$$\Delta x = v_A \cos \theta t$$

$$80 = v_A \cos 25^\circ t$$

$$t = \left(\frac{80}{v_A \cos 25^\circ} \right)$$

Y-dir

$$\Delta y = v_{y0} t - \frac{1}{2} g t^2$$

$$-64 = v_A \sin 25^\circ \left(\frac{80}{v_A \cos 25^\circ} \right) - 4.9 \left(\frac{80}{v_A \cos 25^\circ} \right)^2$$

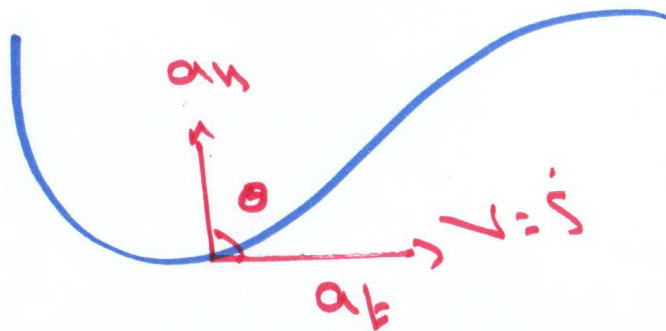
$$v_A = 19.4 \text{ m/s}$$

$$v_{Ax} = 19.4 \cos 25^\circ = 17.6$$

$$v_{Ay} = v_A \sin 25^\circ - 9.8 \left(\frac{80}{19.4 \cos 25^\circ} \right)$$

$$v_{Ay} = -36.4 \text{ m/s}$$

$$|v| = \sqrt{17.6^2 + 36.4^2} = 40.4 \text{ m/s}$$



$$\times v = \dot{s}$$

$$\times a_t = \dot{v} = \ddot{s}$$

$$\times a_n = \frac{v^2}{\rho}$$

$$\times a = \sqrt{a_t^2 + a_n^2}$$

$$\times \theta = \tan^{-1}\left(\frac{a_n}{a_t}\right)$$

$$\times \rho = \frac{(1 + (\dot{y})^2)^{3/2}}{y''}$$

P12.115 | $a_n = a_t = 7.5 \text{ m/s}^2$
 $\rho = 200$

@ max speed ($a_t = 0$)

7.5
 $a_n = \frac{v^2}{\rho}$??
 $\rho = 200$

$v = 38.7 \text{ m/s}$

P12.117

$a_t = 2000 \text{ km/h}^2$, $v = 60 \text{ km/h}$

$R = 600 \text{ m}$

$a_t = \frac{2000 \times 1000}{(3600)^2} = 0.154 \text{ m/s}^2$

$v = \frac{60 \times 1000}{3600} = 16.67 \text{ m/s}$

$a_n = \frac{v^2}{\rho} = \frac{16.67^2}{600}$

$= 0.463 \text{ m/s}^2$

$a = \sqrt{a_n^2 + a_t^2}$

$= 0.488 \text{ m/s}^2$

P12.118 | $R = 50$ ($v = 4$ $s = 0$)

$a_t = \dot{v} = 0.05$ $v = ? @ s = 10$

$\int_0^{10} a_t ds = \int_0^{10} v dv$

$\left[0.05 \frac{s^2}{2} \right]_0^{10} = \frac{1}{2} v^2$

$\therefore v = 4.58 \text{ m/s}$

$a_t = 0.05$
 \downarrow
 $\times 10$
 $= 0.5 \text{ m/s}^2$

$a_c = a_n = \frac{v^2}{R} = \frac{4.58^2}{50} = 0.42 \text{ m/s}^2$

$a = \sqrt{a_n^2 + a_t^2}$
 $= 0.653 \text{ m/s}^2$

P12.121 | $v = 25 \text{ m/s}$, $a_t = 3 \text{ m/s}^2$

$y = \frac{1}{100} x^2$ $x = 30 \text{ m}$

$a_n = \frac{v^2}{R} = \frac{25^2}{R}$

$R = \frac{(1 + y'^2)^{3/2}}{y''}$ $R = 74.3 \text{ m}$

$y' = \frac{2x}{100} = 0.6$

$y'' = \frac{2}{100} = 0.02$

$a_c = a_n = \frac{25^2}{74.3} = 7.88 \text{ m/s}^2$

$a = \sqrt{a_t^2 + a_n^2}$
 $= 8.43 \text{ m/s}^2$

P12.124) $a_t = 0.5e^t$ $s = 18$

$\frac{dv}{dt} = 0.5e^t$ $P = 30$

$v = 0.5(e^t - 1)$

$s = 0.5(e^t - t - 1)$

$* 18 = 0.5(e^t - t - 1)$ $\therefore t = 3.715$

$* v = 0.5(e^{3.71} - 1) = 19.8 \text{ m/s}$

$a_t = 0.5e^{3.71} = 20.43$

$a_n = \frac{19.8^2}{30} = 12.13 \text{ m/s}^2$

$a = \sqrt{a_n^2 + a_t^2}$
 $= 24.3 \text{ m/s}^2$

P12.131) $v = 20$

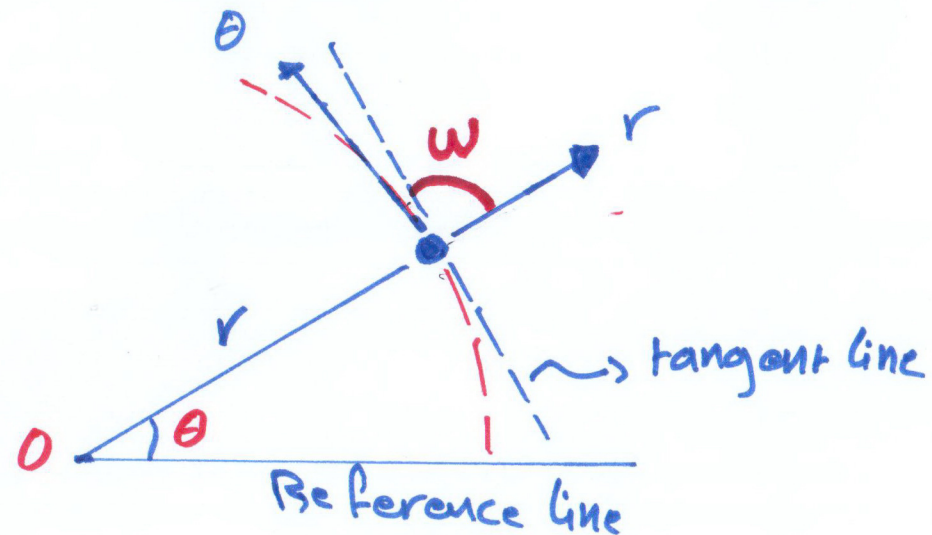
$a_t = 14 \cos 75$
 $a_n = 14 \sin 75$

$* a_t = 3.62 \text{ m/s}^2$

$14 \sin 75$

$\hat{a}_n = \frac{v^2}{\rho}$

$\rho = 29.6 \text{ m}$



$$\otimes \Sigma F = ma$$

$$\otimes \Sigma F_r = mar$$

$$\otimes \Sigma F_\theta = ma_\theta$$

$$\otimes \omega = \frac{\tan^{-1} r}{dr/d\theta}$$

$$\otimes v_r = \dot{r}, \quad v_\theta = r\dot{\theta}$$

$$|v| = \sqrt{v_r^2 + v_\theta^2}$$

$$\otimes a_r = \ddot{r} - r\dot{\theta}^2, \quad a_\theta = r\ddot{\theta} + 2\dot{r}\dot{\theta}$$

$$|a| = r \sqrt{a_r^2 + a_\theta^2}$$

P12.163

$$\dot{r} = 3 \text{ m/s}$$

$$\ddot{r} = 0 \quad r = 2$$

$$\dot{\theta} = 2 \text{ rad/s}$$

$$\ddot{\theta} = 3 \text{ rad/s}^2$$

$$\downarrow v_r = \dot{r} = 3 \text{ m/s}$$

$$\downarrow v_\theta = r\dot{\theta} = 2 \times 2 = 0.4 \text{ m/s}$$

$$|v| = \sqrt{v_r^2 + v_\theta^2} \\ = 3.03 \text{ m/s}$$

$$a_r = \ddot{r} - r\dot{\theta}^2 = 0 - 0.2(2)^2 \\ = -0.8$$

$$a_\theta = r\ddot{\theta} + 2\dot{r}\dot{\theta} = 0.2(3) + 2(3)(2) \\ = 12.6$$

$$|a| = \sqrt{a_r^2 + a_\theta^2} \\ = 12.63 \text{ m/s}^2$$

P12.173

$$\dot{\theta} = 3, \quad r = 0.4\theta, \quad \dot{r} = 0.5$$

$$\ddot{\theta} = 0$$

$$\dot{r} = 0.4\dot{\theta} = 0.4(3) = 1.2 \text{ m/s}$$

$$\ddot{r} = 0.4\ddot{\theta} = 0.4(0) = 0$$

$$\downarrow v_r = \dot{r} = 1.2, \quad \downarrow v_\theta = r\dot{\theta} = 0.5(3) \\ = 1.5$$

$$|v| = \sqrt{1.5^2 + 1.2^2} \\ = 1.9 \text{ m/s}$$

$$a_r = \ddot{r} - r\dot{\theta}^2 = -0.5 \text{ m/s}^2$$

$$a_\theta = r\ddot{\theta} + 2\dot{r}\dot{\theta} = 7.2 \text{ m/s}^2$$

$$|a| = \sqrt{a_r^2 + a_\theta^2} \\ = 8.4 \text{ m/s}^2$$

P12.177 $r = (100 \cos 2\theta)$

$\theta = 15$ $N = 50$

$\dot{r} = -200\dot{\theta} \sin 4\theta$

$\downarrow r = \dot{r} = -100\dot{\theta}$

$\downarrow \theta = r\dot{\theta} = 86.6\dot{\theta}$

$\nearrow 50$
 $v = \sqrt{(-100\dot{\theta})^2 + (86.6\dot{\theta})^2}$

$\dot{\theta} = 0.378$

P12.197 $r = 40 e^{0.05\theta}$, $\dot{\theta} = 4$
 $\theta = 30$, $\ddot{\theta} = 0$

$\theta = \frac{30\pi}{180} = \frac{\pi}{6}$ rad

$\dot{r} = 40 e^{0.05\theta} \cdot 0.05\dot{\theta}$

$\ddot{r} = 2 \left(e^{0.05\theta} \ddot{\theta} + \dot{\theta} e^{0.05\theta} \cdot 0.05\dot{\theta} \right)$

$= 0.1 \dot{\theta}^2 e^{0.05\theta}$

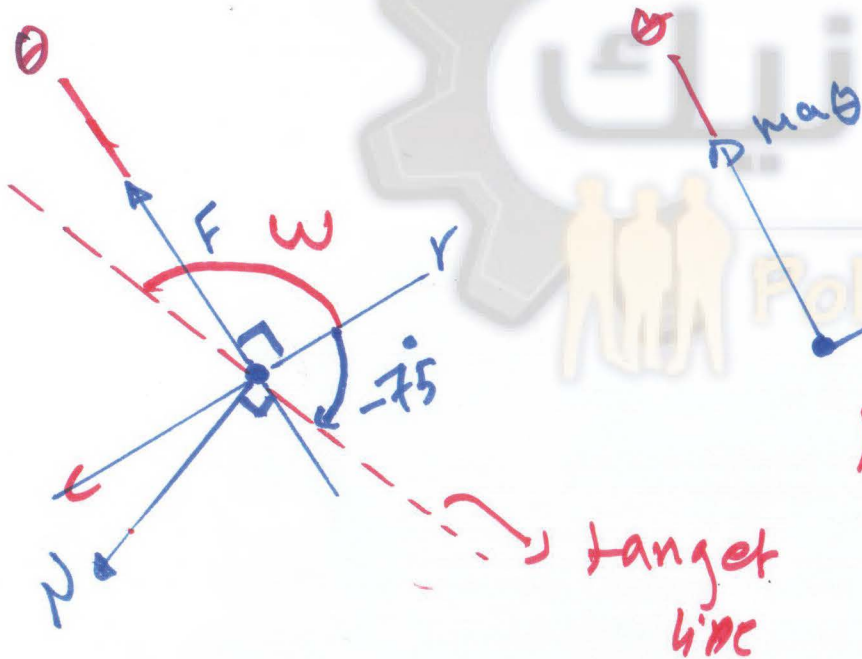
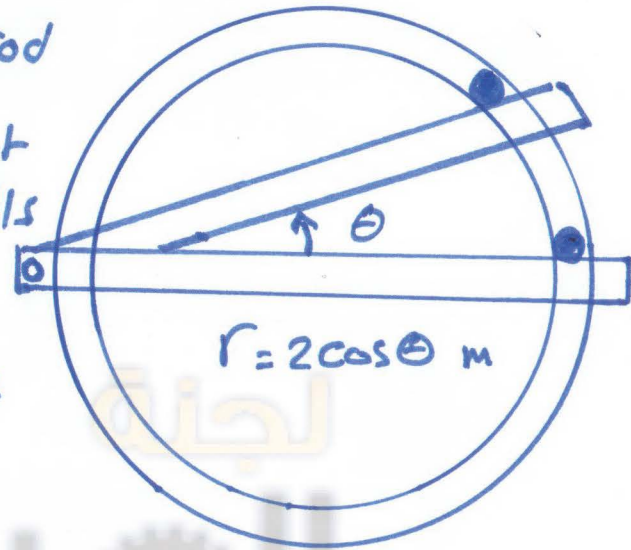
$r = 41.1$, $\dot{r} = 8.21$, $\ddot{r} = 1.64$

$\downarrow r = \dot{r} = 8.21$, $\downarrow \theta = r\dot{\theta} = 164.4$

$v = \sqrt{\dot{r}^2 + \dot{\theta}^2} = \boxed{164.6}$

5...7

ex: A 1 kg-ball is being pushed by a rod to move in a horizontal grooved, smooth slot. it starts from $\theta = 0$. Determine the force the rod exerts on the ball at $\theta = 15^\circ$ if at this instant the rod moves at an angular speed $\dot{\theta} = 1 \text{ rad/s}$ with angular acceleration $\ddot{\theta} = 2 \text{ rad/s}^2$. The ball is only in contact with outside of the slot...



F.B.D

K.D

$$\omega = \tan^{-1} \frac{r}{dr/d\theta}$$

$$\frac{dr}{d\theta} = -2 \sin \theta \quad \text{at } \theta = 15^\circ$$

$$= \frac{\tan^{-1} 2 \cos 15^\circ}{-2 \sin 15^\circ} = \boxed{-75^\circ}$$

$$\rightarrow \sum F_r = -N \sin 75^\circ = m a_r$$

$$\uparrow \sum F_\theta = F - N \cos 75^\circ = m a_\theta$$

$$r = 2 \cos \theta$$

$$\dot{r} = \frac{dr}{dt} = \frac{dr}{d\theta} \cdot \frac{d\theta}{dt} = -2 \sin \theta \dot{\theta}$$

$$\ddot{r} = \frac{d\dot{r}}{dt} = -2 \sin \theta \frac{d\dot{\theta}}{dt} - 2 \frac{d \sin \theta}{dt} \dot{\theta}$$

$$= -2 \sin \theta \ddot{\theta} - 2 \frac{d \sin \theta}{d\theta} \cdot \dot{\theta} \dot{\theta}$$

$$= -2 \sin \theta \ddot{\theta} - 2 \cos \theta \dot{\theta}^2$$

$$\text{@ } \theta = 15, \quad \dot{\theta} = 1, \quad \ddot{\theta} = 2$$

$$r = 2 \cos \theta = \underline{1.932}$$

$$\dot{r} = -2 \sin \theta \dot{\theta} = \underline{-0.5176}$$

$$\ddot{r} = -2 \sin \theta \ddot{\theta} - 2 \cos \theta \dot{\theta}^2 = \underline{-2.967}$$

$$\underline{a_r} = \ddot{r} - r \dot{\theta}^2 = -4.899$$

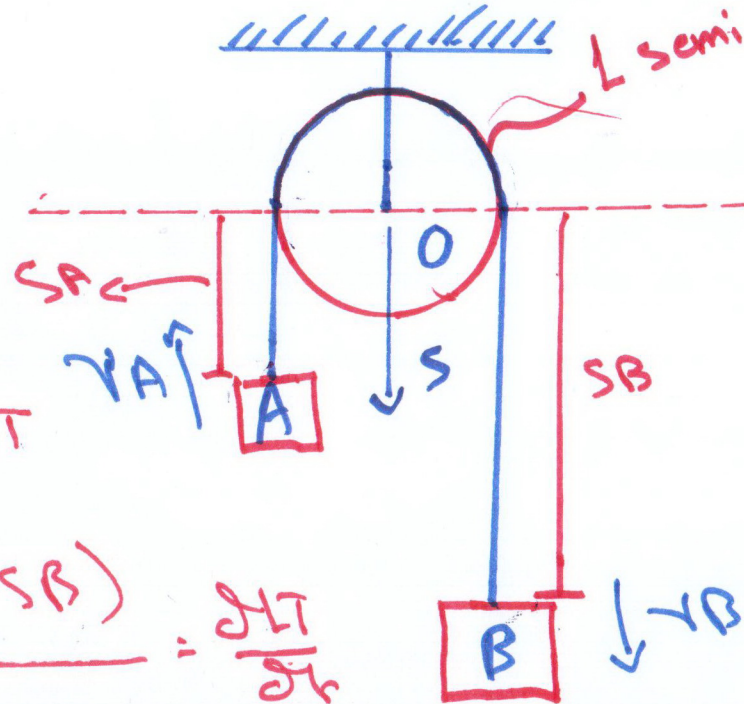
$$\underline{a_\theta} = r \ddot{\theta} + 2 \dot{r} \dot{\theta} = 2.828$$

$$\boxed{\sum F_r} = -N \sin 75 = m a_r$$

$$\boxed{\sum F_\theta} = F - N \cos 75 = m a_\theta$$

$$N = 5.07 \text{ N}$$

$$F = 4.14 \text{ N}$$



Datum

$$S_A + L_{\text{semi}} + S_B = L_T$$

$$\frac{d(S_A + L_{\text{semi}} + S_B)}{dt} = \frac{dL_T}{dt}$$

$$\frac{dS_A}{dt} + 0 + \frac{dS_B}{dt} = 0$$

$$v_A + v_B = 0$$

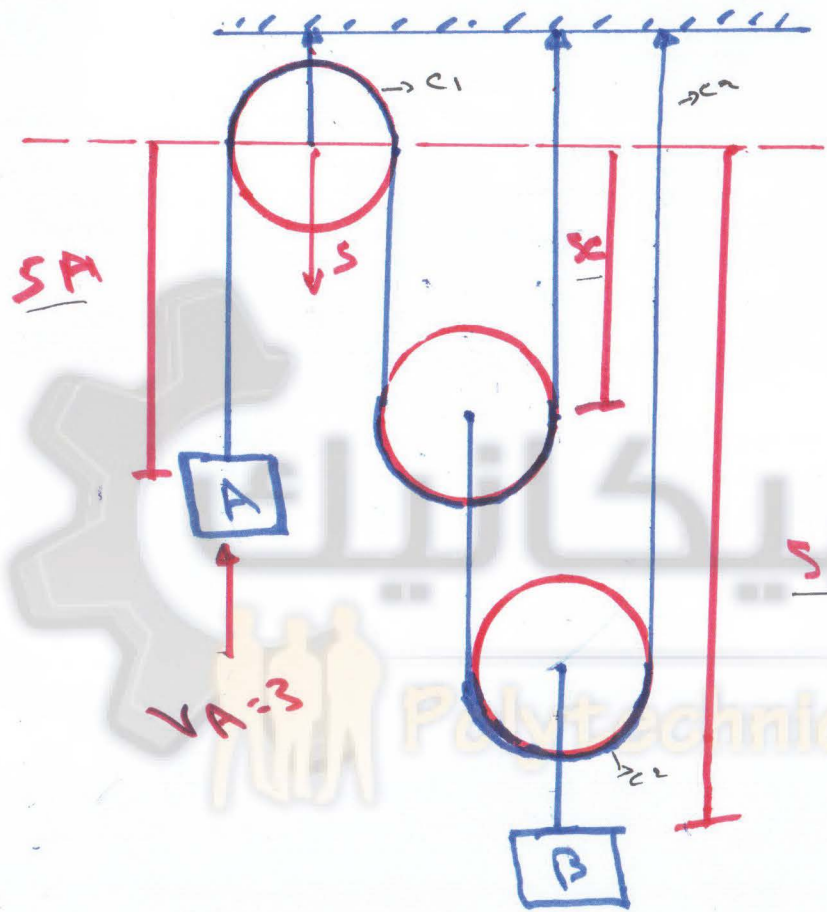
$$v_A = -v_B \quad \text{--- (1)}$$

$$v_A = -v_B$$

$$\frac{dv_A}{dt} = -\frac{dv_B}{dt}$$

$$a_A = -a_B \quad \text{--- (2)}$$

Ex:



Datum

$$s_A + s_C + s_C + c_1 = L_1$$

$$(s_B - s_C) + s_B + c_2 = L_2$$

$$s_A + 4s_B = \text{const}$$

$$v_A + 4v_B = 0$$

$$v_B = -\frac{v_A}{4} = \boxed{0.75 \text{ m/s}}$$

CH12 Section 10: Relative Motion

* Relative position:

$$\vec{r}_{B/A} = \vec{r}_B - \vec{r}_A \quad \text{or} \quad \vec{r}_B = \vec{r}_A + \vec{r}_{B/A}$$

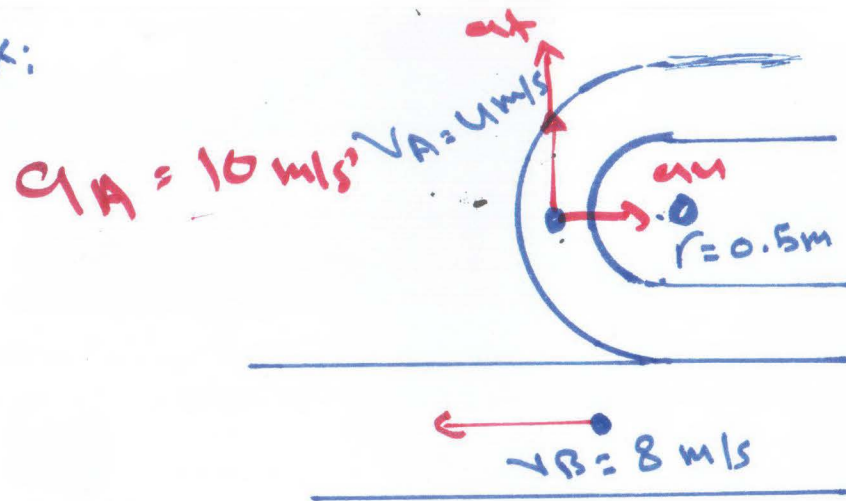
* Relative velocity:

$$\vec{v}_{B/A} = \vec{v}_B - \vec{v}_A \quad \text{or} \quad \vec{v}_B = \vec{v}_A + \vec{v}_{B/A}$$

* Relative acceleration:

$$\vec{a}_{B/A} = \vec{a}_B - \vec{a}_A \quad \text{or} \quad \vec{a}_B = \vec{a}_A + \vec{a}_{B/A}$$

ex:



$$a_B = 5 \text{ m/s}^2$$

$$v_A = 4j \text{ m/s}$$

$$v_B = -8i \text{ m/s}$$

$$v_{A/B} = v_A - v_B \\ = (8i + 4j) \text{ m/s}$$

$$|v_{A/B}| = 8.94 \text{ m/s}$$

$$(a_A)_t = 10j \text{ m/s}^2$$

$$(a_A)_n = \left(\frac{v_A^2}{r} \right) i = 32i \text{ m/s}^2$$

$$a_A = (32i + 10j)$$

$$a_B = -5j$$

$$a_{A/B} = a_A - a_B$$

$$= 27i + 10j$$

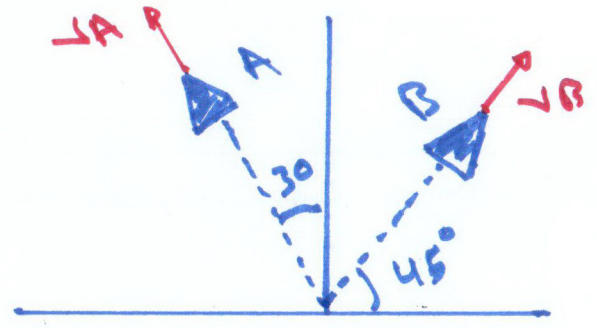
$$|a_{A/B}| = 28.8 \text{ m/s}^2$$

P 12.2273

$v_A = 20$
 $v_B = 15$



$v_{A/B}$

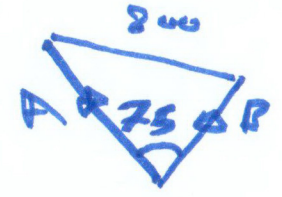


$v_A = v_B + v_{A/B}$

$-20 \sin 30 i + 20 \cos 30 j = 15 \cos 45 i + 15 \sin 45 j + v_{A/B}$

$v_{A/B} = (-20.61 i + 6.714 j)$

$|v_{A/B}| = 21.7 \text{ m/s}$



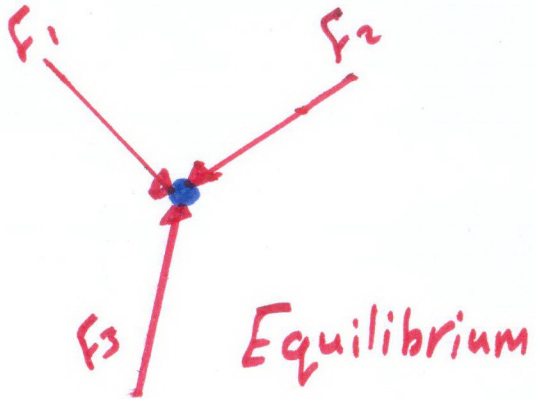
① $(800)^2 = (20t)^2 + (15t)^2 - 2(20t)(15t) \cos 75$

$t = 36.9 \text{ s}$

② $t = \frac{800}{v_{A/B}} = \frac{800}{21.7} = 36.9 \text{ s}$

Ch 13 Equations of Motion

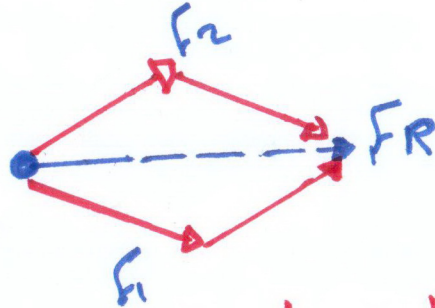
1) Newton's first law



$$\Sigma F = 0$$

$$a = \frac{\Sigma F}{m} = 0$$

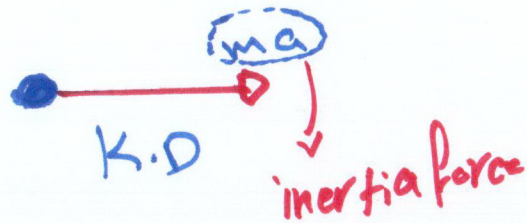
2) Newton's Second law




Accelerated motion

$$\Sigma F = ma$$

$$a = \frac{\Sigma F}{m}$$



3) Newton's third law



Action & Reaction

* Procedure for problem solving

1] Select the inertial coordinate Sys.
(Rectangular, normal/tangential, or cylindrical)

2] Draw F.B.D

3] Draw K.D

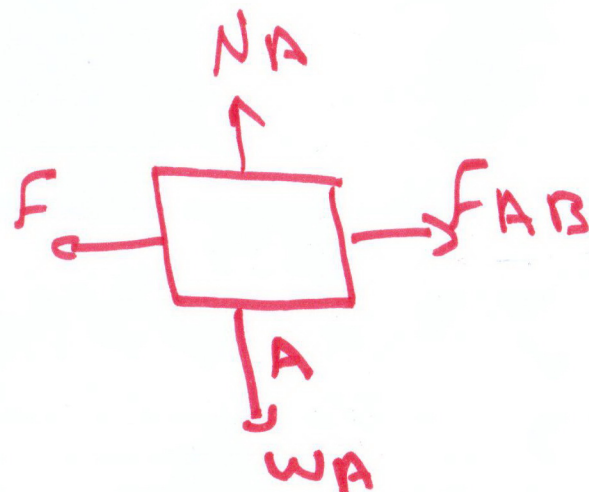
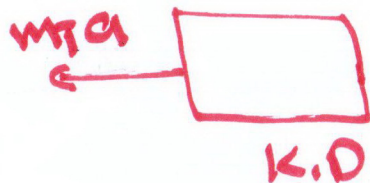
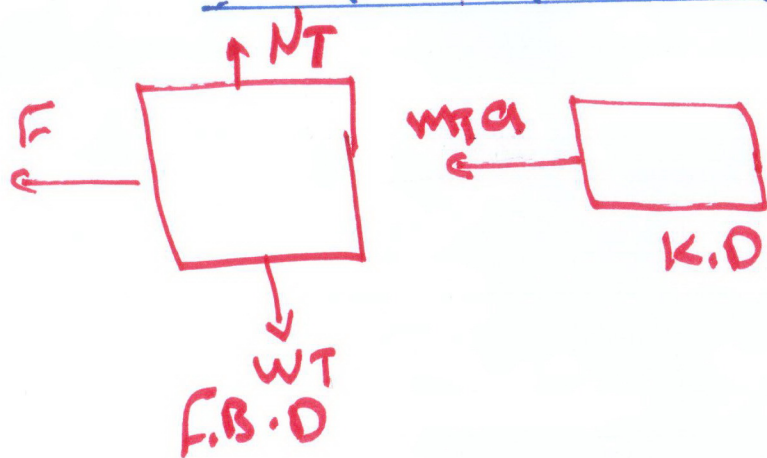
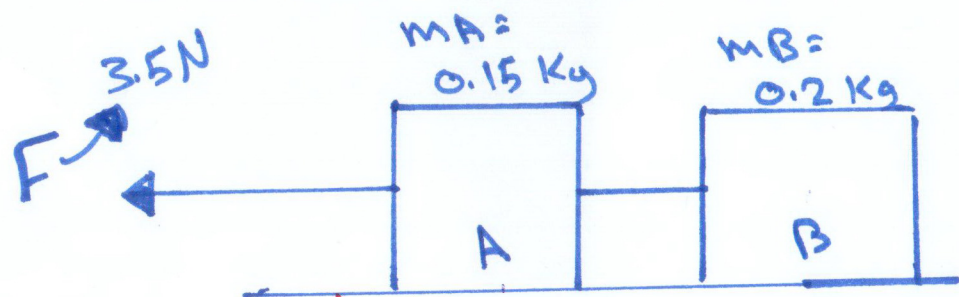
4] Apply the eq. of Motion

5] Identify the unknowns & solve it

$$6] v = \frac{ds}{dt}, \quad a = \frac{dv}{dt}, \quad a ds = v dv$$

Ex: (Rectangular) (Neglect Friction)

Determine the acceleration?
& F_{AB} ?



$$\begin{aligned} \leftarrow \sum F_x &= F = m_T a \\ 3.5 &= (0.15 + 0.2) a \end{aligned}$$

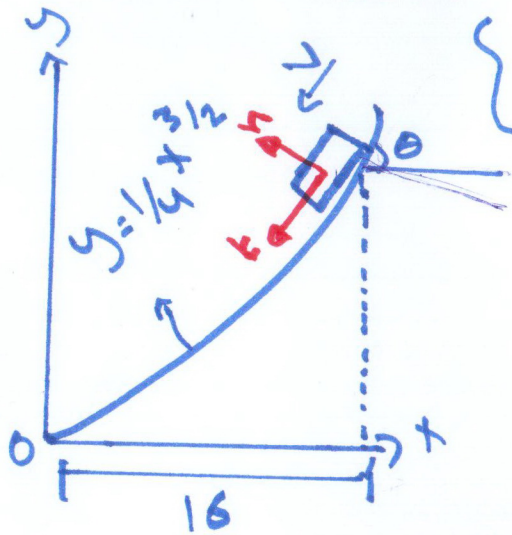
$$a_x = 10 \text{ m/s}^2 \leftarrow$$

$$\begin{aligned} \leftarrow \sum F_x &= F - F_{AB} = m_A a \\ (3.5 - F_{AB}) &= (0.15 * 10) \end{aligned}$$

$$F_{AB} = 2 \text{ N}$$

Ex: (Normal, tangential)

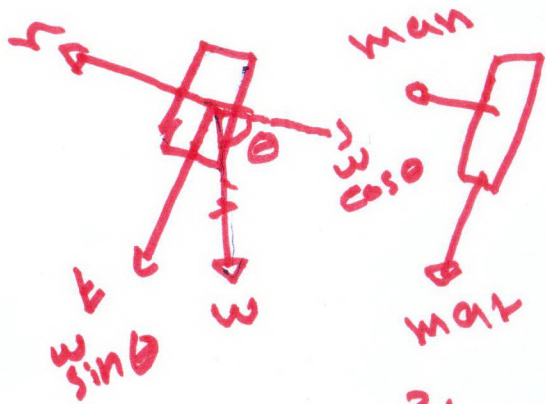
determine the normal force exerted by the slope? And the acceleration?



$m = 10 \text{ kg}$
 $v = 20 \text{ m/s}$

$\uparrow \sum F_n = N - (m \cdot g) \cos \theta = m a_n$

$\downarrow \sum F_t = (m \cdot g) \sin \theta = m a_t$



$\rho = \frac{v^2}{a}$
 $= \frac{20^2}{1.25} = 3.2 \text{ m/s}^2$

$\rho = \frac{(1 + (\frac{dy}{dx})^2)^{3/2}}{\frac{d^2y}{dx^2}}$

$\frac{dy}{dx} = 1.5$, $\frac{d^2y}{dx^2} = \frac{3}{8}$

$\rho = 125 \text{ m}$

$\therefore y = \frac{1}{4} x^{3/2}$

slope = $\frac{dy}{dx} = \frac{3}{8} x^{1/2}$

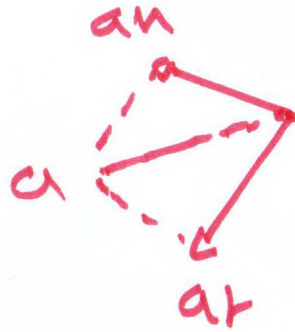
@ $x = 16 \rightarrow s = 1.5 = \tan \theta$

$\theta = \tan^{-1} 1.5 = 56.3^\circ$

$\uparrow N - (10 \cdot 9.81) \cos 56.3 = 10 \cdot 3.2$

$\downarrow (10 \cdot 9.81) \sin 56.3 = 10 \cdot a_t$

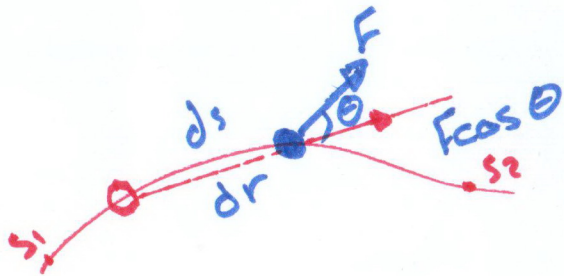
$N = 26.4 \text{ N}$
 $a_t = 8.16 \text{ m/s}^2$



$$a = \sqrt{a_t^2 + a_n^2}$$
$$= 8.77 \text{ m/s}^2$$

Ch III The work of a force

1) work of force



$$dU = F \cos \theta \cdot ds = F \cdot dr$$

$$U_{1-2} = \int_{s_1}^{s_2} F \cos \theta \, ds$$

$$U_{1-2} = \int_{r_1}^{r_2} F \cdot dr$$

$$[N \cdot m] = [J]$$

* Scalar

2) work of weight 3) work of spring

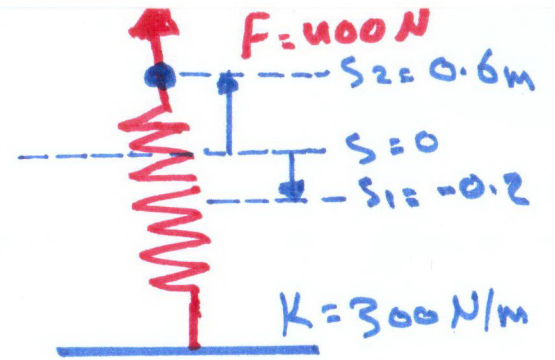
$$U_{W,1-2} = -W(z_2 - z_1) \\ = -W(\Delta z)$$

Positive ↓

Negative ↑

$$U_{1-2} = \int_{r_1}^{r_2} F \cdot dr \\ = \int_{s_1}^{s_2} (-Ks) \, ds = -\frac{1}{2}K(s_2^2 - s_1^2)$$

Ex: The 8 Kg ball is connected with a Spring
 Initially the Spring is compressed by 0.2m, then under the applied force F , the Spring is stretched to 0.6m
 Determine the total work done to the ball?



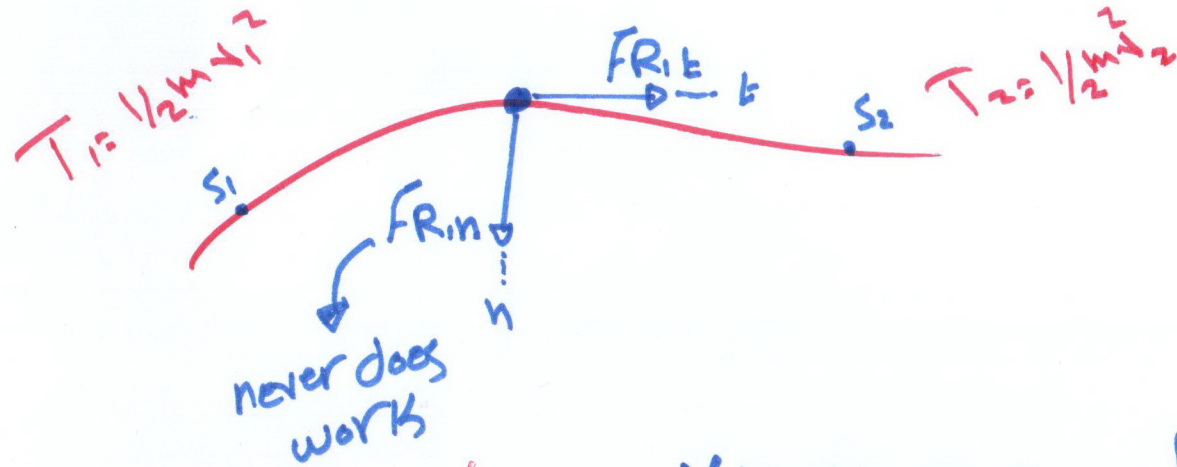
$$\begin{aligned}
 \text{Weight} \quad U_{w, 1-2} &= -W (s_2 - s_1) \\
 &= (-8) (9.81) (0.6 - (-0.2)) \\
 &= -62.8 \text{ J}
 \end{aligned}$$

$$\begin{aligned}
 \text{Spring} \quad U_{SP, 1-2} &= -\frac{1}{2} k (s_2^2 - s_1^2) \\
 &= -\frac{1}{2} (300) (0.6^2 - (-0.2)^2) \\
 &= -48 \text{ J}
 \end{aligned}$$

$$\begin{aligned}
 \text{Force} \quad U_F, 1-2 &= F (s_2 - s_1) \\
 &= 400 (0.6 - (-0.2)) \\
 &= 320 \text{ J}
 \end{aligned}$$

$$\text{Total } W = 209 \text{ J}$$

CHM * principle of work & energy



Kinetic energy of the particle:

$$T = \frac{1}{2} m v^2$$

$$\sum U_{1-2} = T_2 - T_1$$

or

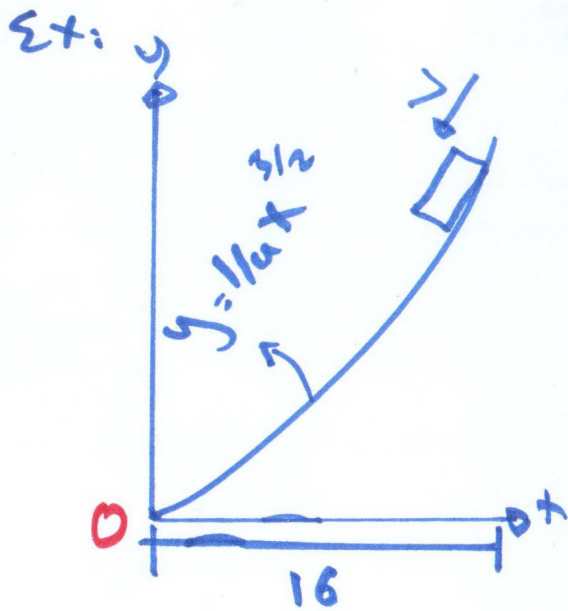
$$T_1 + \sum U_{1-2} = T_2$$

$$\left. \begin{array}{l} F_{R,t} = m a_t \\ a_t ds = v dv \end{array} \right\}$$

$$F_{R,t} ds = m v dv$$

$$\int_{S_1}^{S_2} F_{R,t} ds = m \int_{v_1}^{v_2} v dv$$

$$\sum U_{1-2} = \frac{1}{2} m v_2^2 - \frac{1}{2} m v_1^2$$



$$m = 10 \text{ kg}$$

$$v = 20 \text{ m/s}$$

determine its speed when it gets to the bottom of the slope ($x=0$)?

$$\textcircled{a} x = 16, y_1 = \frac{1}{4} (16)^{3/2} = 16 \text{ m}$$

$$\textcircled{a} x = 0, y_2 = 0$$

$$U_{w,1-2} = -w \Delta y = (-10)(9.81) \times (0 - 16) = 1569.6 \text{ J}$$

$$T_1 = \frac{1}{2} m v_1^2 = \frac{1}{2} (10) (20)^2 = 2000 \text{ J}$$

$$T_2 = \frac{1}{2} m v_2^2 = 5 v_2^2$$

$$T_1 + \Sigma U_{1-2} = T_2$$

$$v_2 = 26.7 \text{ m/s}$$

Ch. 14 ⊗ Power & efficiency

Power

$$P = \frac{dU}{dt}$$

$$dU = F \cdot dr$$

$$P = F \cdot \frac{dr}{dt} = F \cdot v \quad \text{scalar}$$

$$[J/s] [W]$$

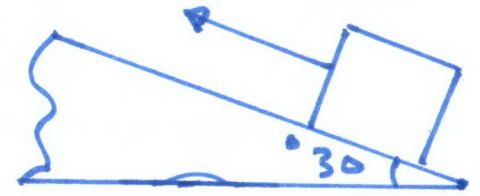
Efficiency

$$\epsilon = \frac{\text{Power output}}{\text{Power input}}$$



Ex: The 50 kg, uniform crate initially rests on the inclined surface, if a force as shown starts to pull the crate, determine the power output developed by the force at $t = 6$ s. The coefficients of static & kinetic friction between the crate & the surface $\mu_s = 0.2$ and $\mu_k = 0.15$.

$$F = (40t + 200) \text{ N}$$



@ $t = 6$ s

$$P = F \cdot v$$

B.M.S

$$\sum F_x = F - W \sin 30 - f_s = 0$$

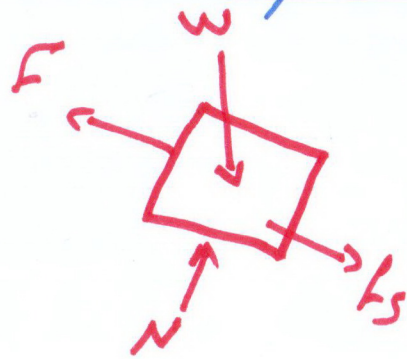
$$\sum F_y = N - W \cos 30 = 0$$

$$\therefore N = 424.8 \text{ N}$$

$$\therefore f_s = \mu_s \cdot N = 0.2 \times 424.8 = 84.96 \text{ N}$$

$$\therefore F = 330.2 \text{ N} = (40t + 200)$$

$$\therefore t = 3.255 \text{ s}$$



A.M.S

$$\sum F_x = F - W \sin 30 - f_s = m a_x$$

$$\therefore (40t + 200) - 245.3 - (0.15) \cdot 424.8 = 50 a_x$$

$$= 50 a_x$$

$$\therefore a_x = 0.8t - 2.18 = \frac{dv_x}{dt}$$

$$v_x = \int_{3.255}^6 (0.8t - 2.18) dt$$

$$\therefore v_x = 4.178 \text{ m/s}$$

$$P = F \cdot v$$

$$= 1.84 \text{ kW}$$

Ch. 14

* Conservation of energy

Conservative force

- A force with the property that the work done to the object only depends on its initial and final positions, but is independent of the path taken

Ex: gravitational force
Spring force

Ex: of Non-Conservative force
frictional force

Potential energy

- The ability (the potential) for a force to do work depending on its position.
- The change in potential energies

$$\text{ex: } \therefore \Delta g = W_z$$

$$\therefore V_e = \frac{1}{2} k s^2 \text{ (always positive)}$$

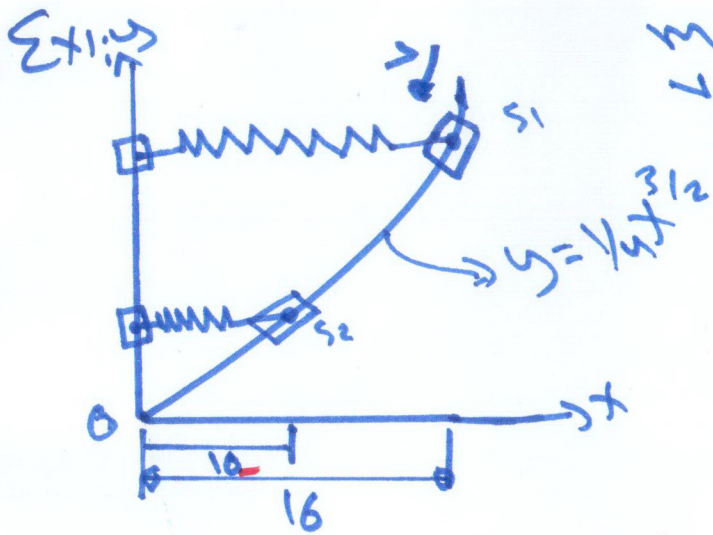
Conservation of energy

$$T_1 + V_1 = T_2 + V_2$$

Kinetic energy \rightarrow Potential energy $\rightarrow V = V_g + V_e$

For a system of particles:

$$\sum T_1 + \sum V_1 = \sum T_2 + \sum V_2$$



$m = 10 \text{ kg}$ on a smooth slope
 $v_1 = 20 \text{ m/s}$, determine the speed at S_2 , the spring remains horizontal. It has an original length 8 m
 $k = 40 \text{ N/m} \dots?$

State 1

$$\begin{aligned}
 K.E = T_1 &= \frac{1}{2} m v_1^2 = \frac{1}{2} (10) (20)^2 = 2000 \text{ J} \\
 g.P.E &= m g y_1 = m g y_1 = (10) (9.81) \left(\frac{1}{4} (16)^{3/2} \right) \\
 &= 1569.6 \text{ J} \\
 \Sigma.P.E &= \frac{1}{2} k s_1^2 = \frac{1}{2} (40) (16 - 8)^2 \\
 &= 1280 \text{ J}
 \end{aligned}$$

State 2

$$\begin{aligned}
 K.E = T_2 &= \frac{1}{2} (10) v_2^2 = 5 v_2^2 \text{ J} \\
 g.P.E &= (10) (9.81) \left(\frac{1}{4} (10)^{3/2} \right) \\
 &= 775.5 \text{ J} \\
 \Sigma.P.E &= \frac{1}{2} (40) (10 - 8)^2 \\
 &= 80 \text{ J}
 \end{aligned}$$

Cons. of energy

$$T_1 + m g y_1 + \frac{1}{2} k s_1^2 = T_2 + m g y_2 + \frac{1}{2} k s_2^2$$

$$v = 28.3 \text{ m/s}$$