

كل ما يحتاجه الطالب في جميع الصفوف من أوراق عمل واختبارات ومذكرات، يجده هنا في الروابط التالية لأفضل مواقع تعليمي إماراتي 100 %

<u>تطبيق المناهج الإماراتية</u>	<u>الاجتماعيات</u>	<u>الرياضيات</u>
<u>الصفحة الرسمية على التلغرام</u>	<u>الاسلامية</u>	<u>العلوم</u>
<u>الصفحة الرسمية على الفيسبوك</u>	<u>الانجليزية</u>	
<u>التربية الاخلاقية لجميع الصفوف</u>	<u>اللغة العربية</u>	
<u>التربية الرياضية</u>		
مجموعات التلغرام.	مجموعات الفيسبوك	قنوات تلغرام
<u>الصف الأول</u>	<u>الصف الأول</u>	<u>الصف الأول</u>
<u>الصف الثاني</u>	<u>الصف الثاني</u>	<u>الصف الثاني</u>
<u>الصف الثالث</u>	<u>الصف الثالث</u>	<u>الصف الثالث</u>
<u>الصف الرابع</u>	<u>الصف الرابع</u>	<u>الصف الرابع</u>
<u>الصف الخامس</u>	<u>الصف الخامس</u>	<u>الصف الخامس</u>
<u>الصف السادس</u>	<u>الصف السادس</u>	<u>الصف السادس</u>
<u>الصف السابع</u>	<u>الصف السابع</u>	<u>الصف السابع</u>
<u>الصف الثامن</u>	<u>الصف الثامن</u>	<u>الصف الثامن</u>
<u>الصف التاسع عام</u>	<u>الصف التاسع عام</u>	<u>الصف التاسع عام</u>
<u>الصف التاسع متقدم</u>	<u>الصف التاسع متقدم</u>	<u>الصف التاسع متقدم</u>
<u>الصف العاشر عام</u>	<u>الصف العاشر عام</u>	<u>الصف العاشر عام</u>
<u>الصف العاشر متقدم</u>	<u>الصف العاشر متقدم</u>	<u>الصف العاشر متقدم</u>
<u>الحادي عشر عام</u>	<u>الحادي عشر عام</u>	<u>الحادي عشر عام</u>
<u>الحادي عشر متقدم</u>	<u>الحادي عشر متقدم</u>	<u>الحادي عشر متقدم</u>
<u>ثاني عشر عام</u>	<u>الثاني عشر عام</u>	<u>الثاني عشر عام</u>
<u>ثاني عشر متقدم</u>	<u>الثاني عشر متقدم</u>	<u>الثاني عشر متقدم</u>

<http://almanahj.com/ae/>

Science Revision Pack - Term 3

Chapter 13: How Things Move (pages 376 - 433)

- Position and Motion, Forces, Uses of Simple Machines and Discover Magnets

Vocabulary

Position, motion, speed, force, gravity, friction, simple, machines, lever, fulcrum, ramp, wheel and axle, pulley, magnet, attract, repel, poles, magnet

Chapter 14: Changes in Matter (pages 436 - 477)

- Changes in Matter, Changes in the States of Matter, Mixtures

Vocabulary

Physical change, chemical change, solid, liquid, gas, evaporate, condense, mixture, solution, dissolve

Chapter 15: Using Energy (pages 480 - 531)

- Heat, Sound, Light, Discover Electricity


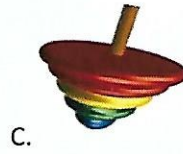

Vocabulary

Heat, fuel, temperature, thermometer, degrees Celsius, sound, vibrate, eardrum, pitch, light, reflect, shadow, prism, filter, current electricity, circuit, power plant, static electricity

Science Exam T3: Grade 2 Mock

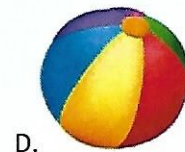
1. Which toy can you move by pushing it?

[3]



2. Which object from the picture would fall the fastest?

[3]



3. Which object is **NOT** a natural light?

[3]

- A. moon
- B. sun
- C. mirror
- D. lightning

<http://almanahj.com/ae/>

4. Which is **NOT** a good way to conserve light energy?

[3]

- A. turn off the light when not in the room
- B. turn off the T.V when not watching it
- C. turn off the ipad when not using it
- D. turn on the T.V and go out to play



5. Which choice is **NOT** one of our five senses?

[3]

- A. hearing
- B. tasting
- C. lifting
- D. smelling

6. Which source of light do we **NOT** use during the night?

[3]

- A.  B.  C.  D. 

7. Light travels in straight line called?

[3]

- A). shadow
B). rays
C). shape
D). pictures

8. What sense can you use to describe the picture?

[3]



<http://almanahj.com/ae/>

- A. tasting
B. smelling
C. hearing
D. sound

9. What sense is the boy using to read the book?




[3]



- A. smelling B. tasting C. seeing D. hearing


10. Which picture is a sound made in the **PAST**?

[3]



11. What is the **BEST** word to describe the picture ?

[3]



A. soft

B. flexible

C. heavy

D. shiny

12. Which picture is made from cotton?

[3]



13. What force is the man using to open the jar?

[3]



A. pull

B. push

C. twist

D. pull

14. Choose the **BEST** word to fill in the blank

[3]

Gravity is the force that pulls all objects_____.

- A. along
- B. push
- C. downwards
- D. pull

15. What is the **BEST** way to conserve energy?


[3]



A. leave the water running while brushing your teeth



B. turn off the light when you leave the room



C. turn on the A.C and leave the room



D. play outside with friends

16. Which of these tools would you use to cut wood?

[3]

A. knife

B. hammer

C. saw

D. spade

<http://almanahj.com/ae/>

17. What material is this tool made from?

[3]



A. cotton

B. metal

C. polyester

D. sink

18. What is the **BEST** material to build a desk?

[3]

A. paper


B. strong

C. wood

D. strong

[3]



19. Which material is heavy, hard and brown?



<http://almanahj.com/ae/>

20. Which picture is the **BEST** example of gravity making it move?

[3]



21. Draw a line to match the objects with their description.

[16]

Wooden spoon

round and smooth

Drinks can

hard and rough

Mirror

soft and flexible

T-shirt

shiny and flat

22. Name three natural light sources

[12]

1. _____

2. _____

3. _____

23. Label the picture with the correct word

[8]

Stretch more	Strong	Stretch least
---------------------	---------------	----------------------





24. Choose the correct word from the box to match each instrument

[12]

hit	blow	pluck	shake
-----	------	-------	-------







<http://almanahj.com/ae/>

25. Write 2 sounds that helps to keep us safe

[2]

1. _____

2. _____
