

احصل على جميع روابط الصفوف

وفق المنهاج الإماراتي

عبر بوت الروابط على تلغرام

t.me/uaelinks_bot

زينب أحمد @ قروب أمهات الصف الثاني 🥰💕
الاعنده نموذج الوزاري يرسله لو سمحتو الدليل تبع العام الحالي

Science
Number of pages: (8)

Grade: 2

End of term (3)
For the academic year 2018-2019

Part One

45

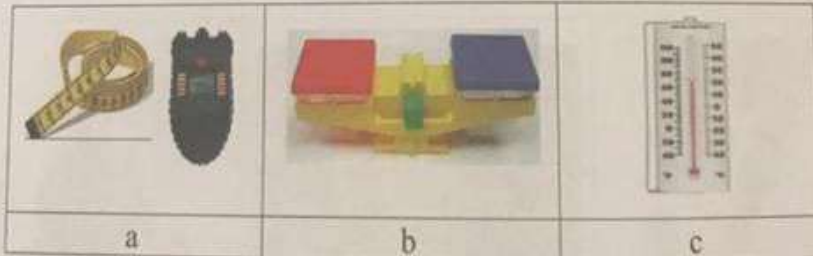
Circle the correct answer (a,b or c) :

1. What does this image describe?

- a. weight
- b. force
- c. position



2. Which of the following is used to measure speed?



3. Which movement indicates ups and downs?

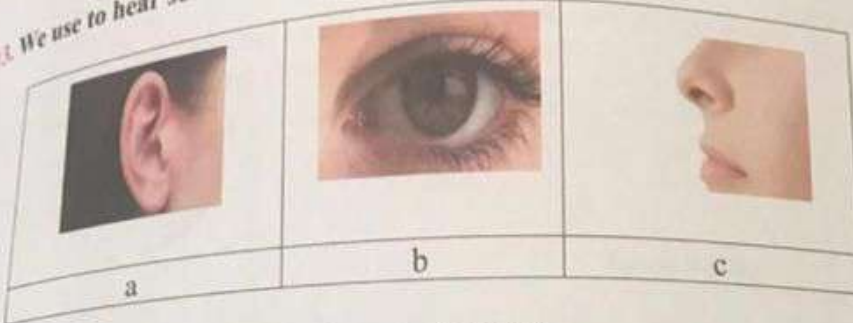


It is prohibited to photocopy or circulate the exam paper before / during and after the examination. Violation will be subject to disciplinary action.



End of TERM (3) exam- For the academic year 2018/2019- SCIENCE - GRADE TWO

13. We use to hear sounds.....



14. Which part of this circuit makes electricity?

- a. the wires
- b. the light bulb
- c. the battery



15. Which of the following can make light bend?



It is prohibited to photocopy or circulate the exam paper before / during and after the exam through e-mail, social media or any other means; and whoever violates this will be subject to the followed legal proceedings.
School Administrations, Exam Committees and Marking Centers shall take this into account, monitor violations and take necessary measures



End of TERM (3) exam- For the academic year 2018/2019- SCIENCE- GRADE TWO

10. Which of these can change matter into different matter?

- a. burning
- b. folding
- c. tearing

11. Which item is a solution?



a



b



c

12. Where does most of our heat come from?



a



b



c



It is prohibited to photocopy or circulate the exam paper before / during and after the exam through e-mail, social media or any other means; and whoever violates this will be subject to the followed legal proceedings.

School Administrations, Exam Committees and Marking Centers shall take this into account, monitor violations and take necessary measures.



@ قروب أمهات الصف الثاني .
الاسئلة بحكوا سهله

End of TERM (3) exam- For the academic year 2018/2019- SCIENCE- GRADE TWO

4. What makes a ball speed slow down and stop?

- a. friction
- b. shape
- c. volume




5. How does a fish swim to get to the top of the bowl?

- a. against gravity
- b. with gravity
- c. without gravity



6. Which one of the following is a ramp?



It is prohibited to photocopy or reproduce any part of this book without the permission of the publisher.



امتحان نهاية الفصل الدراسي الثالث - العام الدراسي 2019/2018 - مادة العلوم - الصف الثاني

13. يمكننا سماع الصوت عن طريق.....



14. أي جزء ينتج الطاقة الكهربائية في الدارة التالية؟

أ. الأسلاك

ب. المفتاح

ج. البطارية

alManahj.com/ae



ب. مما يلي هو انكسار للضوء؟



ج



ب



ا

End of TERM (3) exam- For the academic year 2018/2019- SCIENCE- GRADE TWO

Write the word that best complete each sentence in the spaces below. Words may be used only once.

gravity	vibrate	magnet	reflect	evaporation	fuel	friction
---------	---------	--------	---------	-------------	------	----------


27. Sound is made when objects.....
28. We can see the objects because of the light they.....
29. Objects fall to the floor because of force called.....
30. The force that slows down moving things is called.....
31. can take a part a mixture of sand and iron filings.
32. can take a part a solution of salt and water.
33. Something that gives off heat when it burns is called

End of exam



End of TERM (3) exam- For the academic year 2018/2019- SCIENCE- GRADE TWO

7. What object will not be attracted by a magnet?

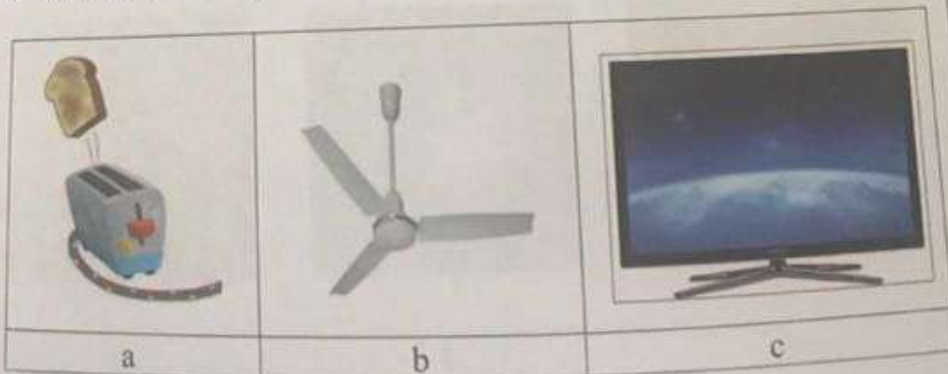


8. Look at picture. What force is the child using to close The door?

- a. pushing
b. pulling
c. gravity



9. Which of the following uses electric energy to get heat?



It is prohibited to photocopy or circulate the exam paper before / during and after the exam through e-mail, social media or any other means, and whoever violates this will be subject to the followed legal proceedings.
School Administrations, Exam Committees and Marking Centers shall take this into account, monitor violations and take necessary measures.



End of TERM (3) exam- For the academic year 2018/2019- SCIENCE - GRADE TWO

55

Part Two

16. Look at the pictures on the left. Draw a line from each picture to the words that tell how matter is changing.

		Gas to liquid
		Liquid to gas
		Liquid to solid
		Solid to liquid



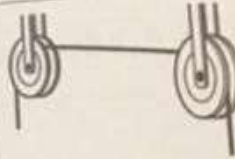


- It is prohibited to photocopy or circulate the exam paper before / during and after the exam through e-mail, social media or any other means; and whoever violates this will be subject to the followed legal proceedings.
- School Administrations, Exam Committees and Marking Centers shall take this into account, monitor violations and take necessary measures



End of TERM (1) exam For the academic year 2018/2019- SCIENCE- GRADE TWO

17. Look at the chart below. Write the name of machine shown in the space beneath each picture

Simple Machines		
		
.....

18. Write the type matter change (physical or chemical) under the image

			
.....

Read the following sentences, then write true (T) or false (F) between brackets.

19. () A balance measures the mass.
20. () The farther a magnet is away from an object, the stronger the magnets attraction.
21. () The pull of a magnet strongest is at the poles.
22. () Changing the size and shape of the matter is a physical change .
23. () Sounds are different in pitch.
24. () Most light on Earth comes from the moon .
25. () Lightning is static electricity .
26. () The tool used to measure temperature is thermometer.

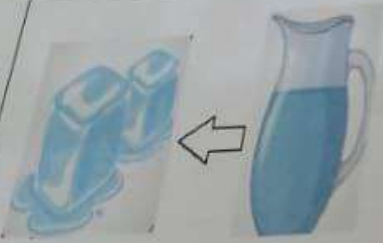
It is prohibited to photocopy or circulate the exam paper before / during and after the exam through e-mail, social media or any other means; and whoever



16. صل بخط بين الجملة والصورة:



غاز إلى سائل



سائل إلى غاز



سائل إلى مادة صلبة



مادة صلبة إلى سائل

alManahj.com/ae