

1718-MC102-J
MATHEMATICS
 Level C
 Term 1 CAT 2

Student Name: _____


Grade/Section: _____

Total Score (%): (_____ / 99 Points) * 100

Total Time: 50 Minutes
 Total Points: 99 Points

1. Solve (5 points)





4  swimming in a pond.

1  swam away, and then there were

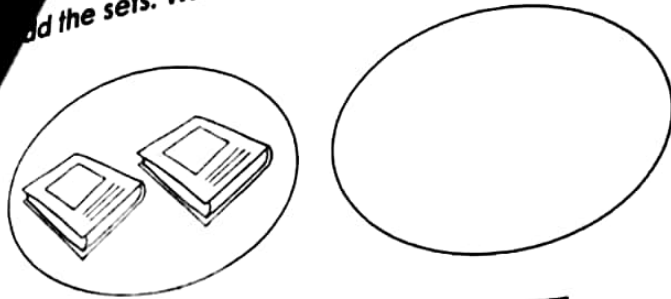
 fish left.

alManahj.com/ae

2. Subtract. Cross out and write the difference. (20 points)

 $8 - 3 =$	 $3 - 2 =$
 $5 - 1 =$	 $10 - 4 =$

61
Add the sets. Write the numeral. (18 points)



+ =



+ =

4. Circle the dog to the left. (4 points)



the missing addend. (6 points)

A. $5 + \boxed{} = 6$

B. $3 + \boxed{} = 10$

C. $2 + \boxed{} = 2$

6. Add and write the total. (12 points)

$$\begin{array}{r} 2 \\ + 4 \\ \hline \end{array}$$

$$\begin{array}{r} 7 \\ + 0 \\ \hline \end{array}$$

$$\begin{array}{r} 4 \\ + 5 \\ \hline \end{array}$$


alManahj.com/ae

$$\begin{array}{r} 8 \\ + 2 \\ \hline \end{array}$$



$$\begin{array}{r} 5 \\ + 5 \\ \hline \end{array}$$

$$\begin{array}{r} 4 \\ + 4 \\ \hline \end{array}$$

Count how many are in each set. Write the numeral.
How many are there in all? Write the total. (12 points)



+ =



+ =

alManahj.com/ae

Subtract and write the difference. (8 points)

$$\begin{array}{r} 7 \\ - 6 \\ \hline \end{array}$$

$$\begin{array}{r} 5 \\ - 2 \\ \hline \end{array}$$

$$\begin{array}{r} 3 \\ - 1 \\ \hline \end{array}$$

$$\begin{array}{r} 6 \\ - 4 \\ \hline \end{array}$$

9. Write the numeral. The first one is done for you. (8 points)

Six 6

ten

four


seven

one

alManahj.com/ae

inside or outside. (6 points)

inside	outside
--------	---------



alManahj.com/ae

A. The man is _____ the igloo.

B. The bear is _____ the igloo.

C. The sun is _____ the igloo.